



Name: \_\_\_\_\_ Date: \_\_\_\_\_

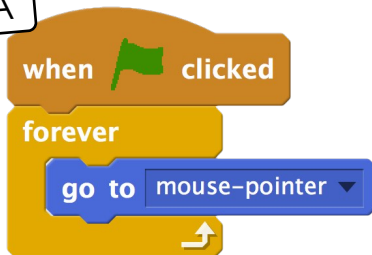
I can use the mouse to make things happen in my programs

LessonID: 164



How are these programming blocks different? Test each one on the computer then describe what is happening.

Code A



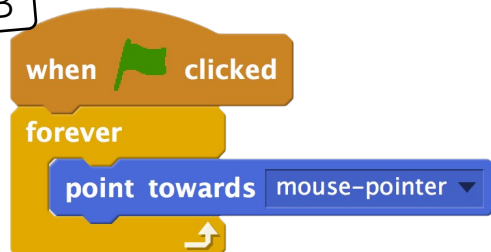
What happens when this code runs?

.....

.....

.....

Code B



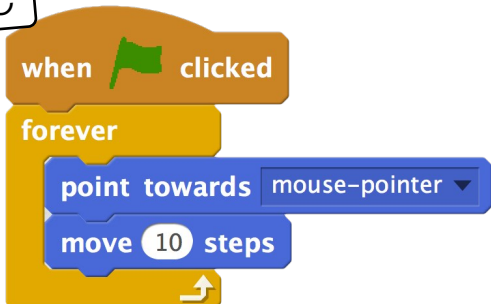
What happens when this code runs?

.....

.....

.....

Code C



What happens when this code runs?

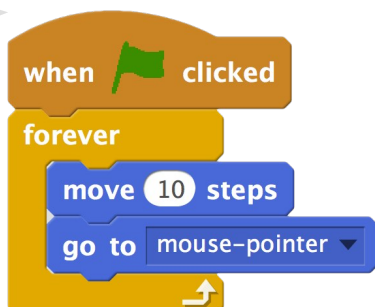
.....

.....

.....



The block of code below has exactly the same result as one of those above. Which one and why?



Identical to: ☐ Code A ☐ Code B ☐ Code C

This is because .....

.....

.....