



Name: _____ Date: _____

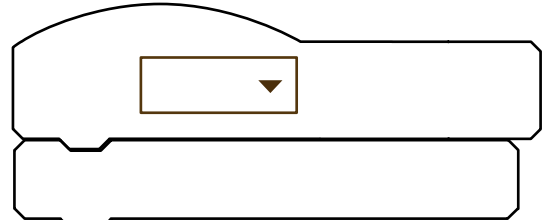
I can use the keyboard to make things happen in my programs

LessonID: 163

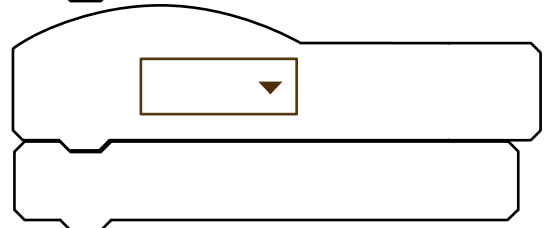


For each of these rules, fill in the missing programming blocks.
Test each one within Scratch to check it works correctly.

Move the sprite clockwise 15 degrees
when the K key is pressed.

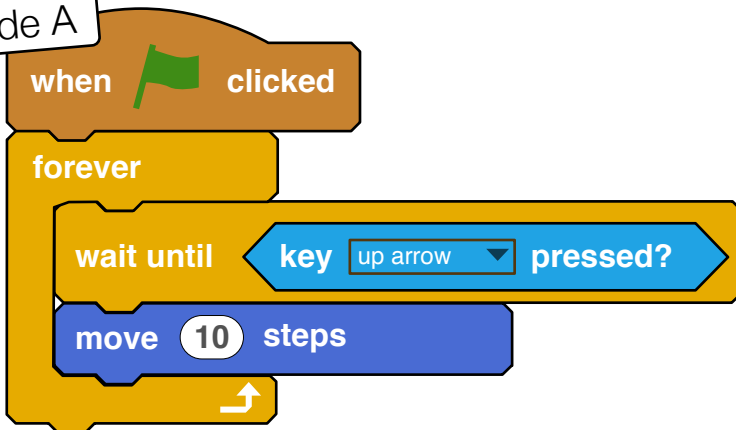


Change the sprite's costume when the
space key is pressed.

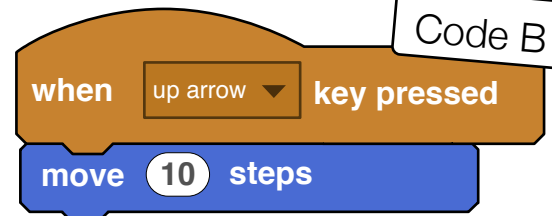


Jim is designing a computer game where a sprite will fly around
the screen dodging asteroids. He can't decide which of these
two blocks of code is best. See if you can help him out.

Code A



Code B



Which code will make the sprite move every time the up arrow is pressed?

☐ Code A ☐ Code B ☐ Both ☐ Neither

Which code is best for Jim's game and why? ☐ Code A ☐ Code B

.....
.....